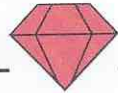


Name: _____

Primary 5-a-day

Ruby



11th October

$1 + 1 =$

2

$14 - 1 =$

13

$8 + 4 =$

12

$8 +$

9

$= 17$

Make each statement correct by writing **more** or **less** in each box.

17 is

less

than 20

74 is

more

than 55

16 is

less

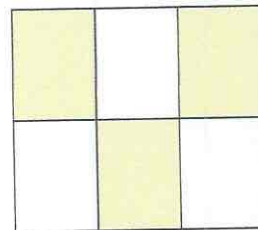
than 27

Is half of this shape shaded?


Yes



No



Anwen has 11 strawberries.
She then eats some strawberries.
Here is how many she has left.



How many strawberries did Anwen eat?

$11 - 3 = 8$

8