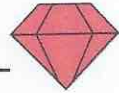


Name: _____

Primary 5-a-day

Ruby



12th October

$9 - 1 =$

8

$14 - 2 =$

12


$4 + 5 =$

9

12

$+ 8 = 20$

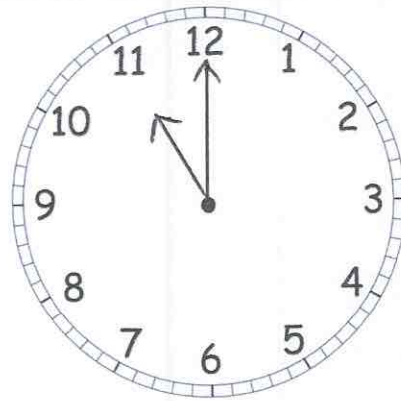
Put a tick (✓) above the penguin that is 3rd in the line.



start

end

Show the time **11 o'clock** on the clock.



Penny has 20 sweets.

She gives 17 sweets away.

How many sweets does Penny have left?

$20 - 17 = 3$

3