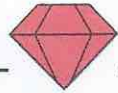


Name: \_\_\_\_\_

Primary 5-a-day

Ruby



13th October

$1 + 12 =$

13

Half of 2 is

1


$8 + 10 =$

18

$17 - 13 =$

4

How many dots are there altogether?



10

There are 10 pens in a tub.

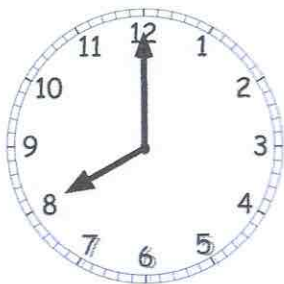
3 of the pens are green and the rest are blue.

How many blue pens are there?

$10 - 3 = 7$

7

What time does the clock show?  
Tick the correct box.



12 o'clock

half past 8

half past 7

8 o'clock ✓