

Name: \_\_\_\_\_

Primary 5-a-day

Ruby



14th October

$3 + 3 =$

6

$10 -$

7

$= 3$

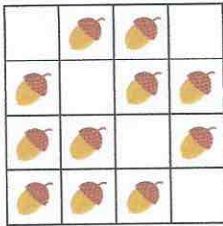
$20 - 2 =$

18

Half of 10 is

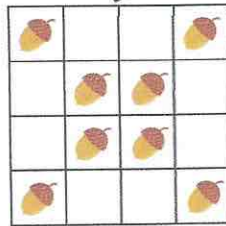
5

Circle the person with the fewest acorns.



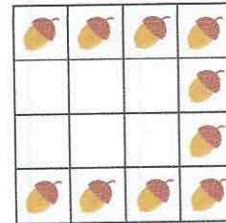
11

Grace



8

Beth



10

Lucy

How much money is there?



14 p

Write the missing number in the box.

$10 + 4 = 7 +$

7