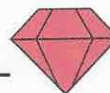


Name: _____

Primary 5-a-day

Ruby



8th October

$2 + 4 =$

6

$16 - 10 =$

6


$12 + 7 =$

19

$11 - 5 =$

6

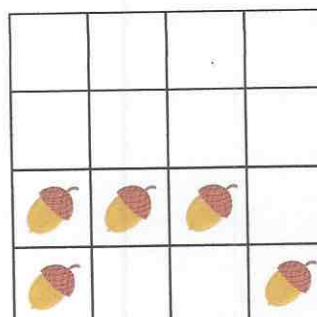
What number is **5 more** than the number on the dice?



10

How many acorns are needed to fill the grid?

$16 - 5 = 11$



11

Tick the clock that shows **half past seven**

