

Name: _____

Primary 5-a-day

Ruby



10th September

$2 + 8 =$

$20 - 1 =$

$11 - 2 =$

$5 + 13 =$

Which pencil is the **shortest**?

A




B



C



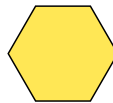

D



Here is a pattern of shapes.



Circle the missing shape.



Liam has 3 stickers.

Noah has 9 stickers.

Oliver has 5 stickers.

How many stickers do they have altogether?