

Name: _____

Primary 5-a-day

Ruby



1st September


$12 + 1 =$

$6 + 6 =$

$9 - 2 =$

$16 - 6 =$

Circle two dice that add up to 10



Tick the box that has 20p



Write in the missing numbers in this pattern.

20

25

30

Name: _____

Primary 5-a-day

Ruby



2nd September

$1 + 9 =$

$10 - \square = 5$

$3 + 9 =$

$8 + 6 =$

28 is more than 19

True False

80 is less than 18

True False

A shop sells

an apple for 9p

a banana for 7p

a strawberry for 4p

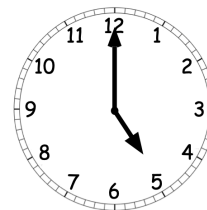
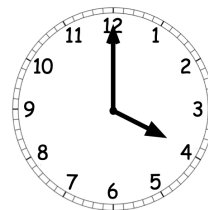
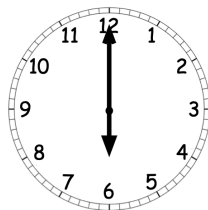
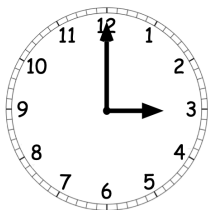
a cherry for 1p

Find the cost of



p

Tick the clock that shows **four o'clock**.



Name: _____

Primary 5-a-day

Ruby



3rd September

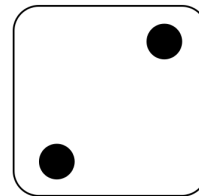
$$1 + \square = 10$$

$$7 - 5 = \square$$

$$2 + 3 + 4 = \square$$

Double 2 \square

What number is **5 more** than the number on the dice?



Write a number in each box to make a correct calculation.

$$\square + 10 + \square = 19$$

Circle all the **odd** numbers.

8 4 5
3 6 2

Name: _____

Primary 5-a-day

Ruby



4th September


$2 + 9 =$

$10 - 2 =$

Half of 8 is

$5 + 10 + 5 =$

Put a tick (✓) above the dog that is 3rd in the line.



start

end

Roy has 12 cakes.

Dan has 6 cakes.

How many cakes do they have altogether?

Write the missing number in the box.

$9 + 4 = 10 +$

Name: _____

Primary 5-a-day

Ruby



5th September

$10 - 2 =$

$8 - 6 =$

$16 - 3 =$

$6 + 9 =$

Joshua has 2 apples.



George has 6 apples.

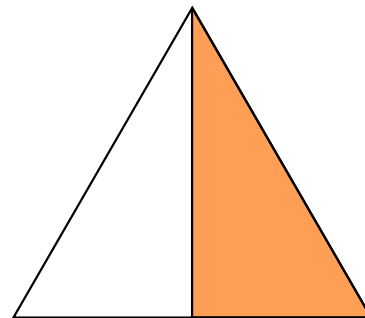


How many apples do they have altogether?

Is half of this shape shaded?

Yes

No



Count down in twos.

20

18

Name: _____

Primary 5-a-day

Ruby



6th September

$3 - 1 =$

$6 - 4 =$

$= 6 + 14$

$16 - 8 =$

Write in the missing numbers in this pattern.

84

83


81

Tick the name of the shape.

Sphere

Cube

Pyramid



Lara scored 9 goals.

Mabel scored **4 fewer** goals than Lara.

How many goals did Mabel have?

Name: _____

Primary 5-a-day

Ruby



7th September

$7 + 1 =$

$16 - 4 =$

$4 + 6 =$

$8 + 8 =$

There are 10 buses at a station.

8 of the buses leave.

How many buses are left?

Write the correct number in each box.

9 is 2 more than

8 is 2 less than

Write the missing number in the box.

$8 + 8 -$

$= 11$

Name: _____

Primary 5-a-day

Ruby



8th September

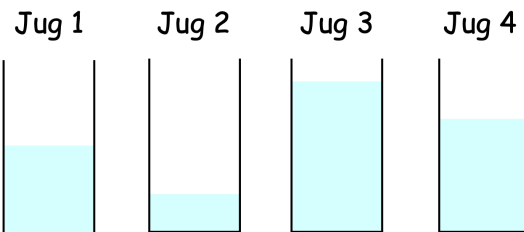
$6 + 2 =$

$8 - 4 =$

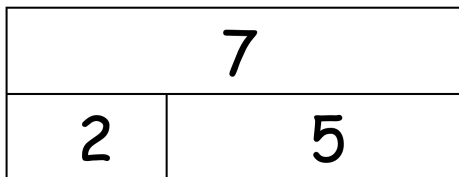
$14 - 1 =$

$12 - 5 =$

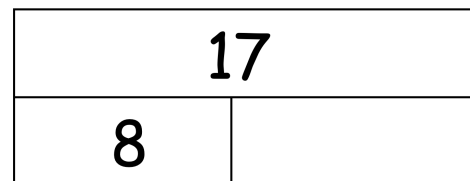
Which jug is the **most full**?



This picture shows $2 + 5 = 7$



Here is another picture.
Write the missing number in the box.



Beth is counting up in fives to 50.
Shade the rest of the numbers that she will say.

1	2	3	4	5	6	7	8	9	10
11	12	13	14	15	16	17	18	19	20
21	22	23	24	25	26	27	28	29	30
31	32	33	34	35	36	37	38	39	40
41	42	43	44	45	46	47	48	49	50

Name: _____

Primary 5-a-day

Ruby



9th September

$1 + 7 =$

$20 - 8 =$

$6 - 3 =$

$+ 2 = 17$

Write down the number that is **one less** than 40.

How much money is there?



p

Dan swims 20 metres.
Joe swims 15 metres.



How much further did Dan swim than Joe?

metres

Name: _____

Primary 5-a-day

Ruby



10th September

$2 + 8 =$

$20 - 1 =$

$11 - 2 =$

$5 + 13 =$

Which pencil is the **shortest**?

A



B



C



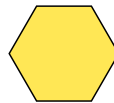

D



Here is a pattern of shapes.



Circle the missing shape.



Liam has 3 stickers.

Noah has 9 stickers.

Oliver has 5 stickers.

How many stickers do they have altogether?

Name: _____

Primary 5-a-day

Ruby



11th September

$9 - 3 =$

$17 - 3 =$

$5 + 10 =$

$13 - 8 =$

How many sides does a triangle have?


Tick the number **forty**

40

14

4

Mabel has 19 cherries.
She then eats some cherries.
Here is how many she has left.



How many cherries did Mabel eat?

Name: _____

Primary 5-a-day

Ruby



12th September


$7 + 2 = \square$

$12 - 11 = \square$

$10 - \square = 9$

$18 - 8 = \square$

How many dots are there altogether?



Match the numbers that **add to 15**

9

10

11

8

4

6

5

7

Tim has a 20p coin.

He buys a banana for 16p.

How much change will he get back?

 p

Name: _____

Primary 5-a-day

Ruby



13th September

$4 - 2 =$

$9 - 8 =$

$12 - 9 =$

$16 - 15 =$

thirty-one

twenty-eight

forty

28

31

82

40

14

Flynn has 15 pencils.

Gus has 11 pencils.

How many more pencils does Flynn have than Gus?

Write six **different** numbers in the boxes to make these correct.

$\square + \square = 14$

$\square + \square = 14$

$\square + \square = 14$

Name: _____

Primary 5-a-day

Ruby



14th September

$2 + 5 =$

$15 - 1 =$

$8 + 8 =$

$10 - 4 =$

Write down the number that is **one more** than 29.

Put these numbers in order, from smallest to biggest.

10

6

11

7

smallest

biggest

Tom has 16 toys.

He gives some of his toys to Ben.

Tom has 3 toys left.

How many toys did Tom give Ben?

Name: _____

Primary 5-a-day

Ruby



15th September

$2 + 5 =$

$7 + 8 =$

$14 + 4 =$

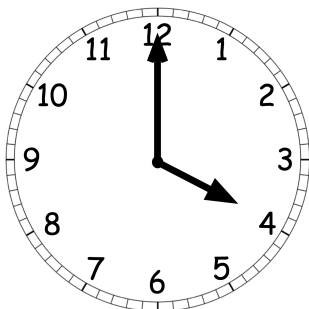
$8 =$

$- 6$

Add together 6 and 6.

Write the number **twelve** in figures.

What time does the clock show?
Tick the correct box.



3 o'clock

half past 3

4 o'clock

half past 4

Name: _____

Primary 5-a-day

Ruby



16th September

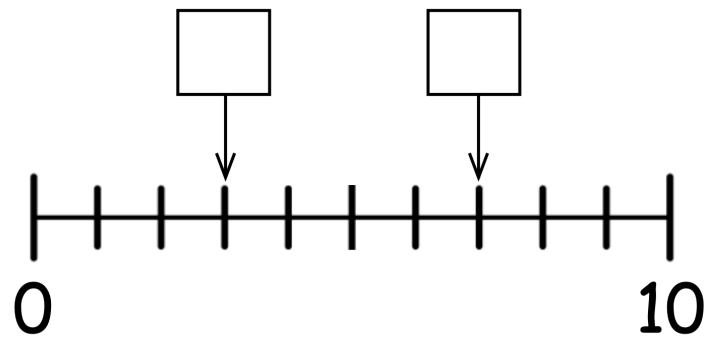
$1 + 6 =$

$12 - 3 =$

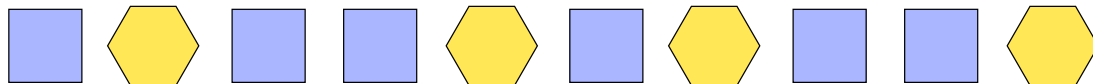
$4 + 7 =$

$20 - 18 =$

Write the missing numbers in the boxes.



Tick the 3rd blue square.



Write down an **odd number** in between 10 and 14.

Name: _____

Primary 5-a-day

Ruby



17th September

$5 - 3 =$

$13 - 1 =$

$3 + 8 =$

$14 + 5 =$

Write these numbers in the correct box.

24

30

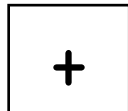

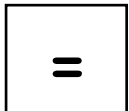
18

26

less than 25

more than 25

Here are some signs.



Write a sign in each box to make this correct.

10

4

6

Fill in the missing number to make this pair of cards have a total of 13.

11

Fill in the missing number to make this pair of cards have a total of 13.

6

Name: _____

Primary 5-a-day

Ruby



18th September

$8 - 1 =$

$2 + 2 =$

$10 +$

$= 10$

$12 + 4 =$

Circle the coin that has the **lowest** value.



Is Ben correct?

Yes

No

A triangle
has 4 sides



Josie has 9 pets.

Ken has 3 pets.

Liam has 5 pets.

How many pets do they have
altogether?

Name: _____

Primary 5-a-day

Ruby



19th September

$3 + 1 =$

$10 - \quad = 0$

$9 + 2 =$

$7 + 5 =$

Tick the calculation with the smallest answer.

$10 + 10$

$20 - 1$

$11 + 3$

$17 - 2$

Circle the coins that are worth less than 50p



Write these words in the correct boxes.

door

table

chair

sofa

4 letters

5 letters

Name: _____

Primary 5-a-day

Ruby



20th September

$3 + 2 + 1 =$

$8 - 3 =$

$8 + 6 =$

$19 - 16 =$

Write down the number that is **one more** than 17.


Tick the day that comes in between Wednesday and Friday.

Monday

Tuesday

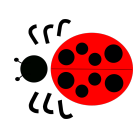
Thursday

Here is a ladybird.



The ladybird makes a **half turn**.

Circle which way the ladybird now faces.



Name: _____

Primary 5-a-day

Ruby



21st September

$1 + 2 =$

$13 + 2 =$

$6 + 7 =$

$14 - 5 =$

Tick the day after Saturday.

Friday

Monday

Sunday

Tuesday

Circle the **months of the year**

February

Thursday

Friday

July

August

Alfie has 8 apples.

Half of the apples are red.

How many red apples does Alfie have?

Name: _____

Primary 5-a-day

Ruby



22nd September

$2 + 7 =$

$8 - 5 =$

$6 + 6 =$

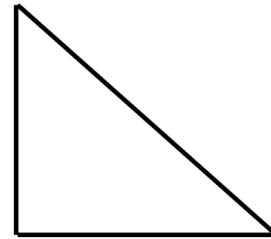
$19 - 9 =$

Tick the name of the shape.

Square

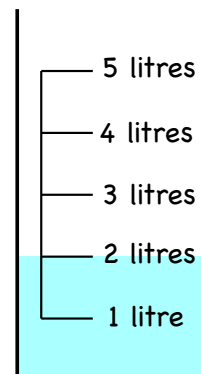
Circle

Triangle



How much water is in the jug?

litres



Write these numbers in the correct box.

3

6

7

8

even numbers

odd numbers

Name: _____

Primary 5-a-day

Ruby



23rd September

$9 - 7 =$

Half of 10 is

$4 + 10 =$

$7 + 2 + 2 =$

How many cupcakes are there?



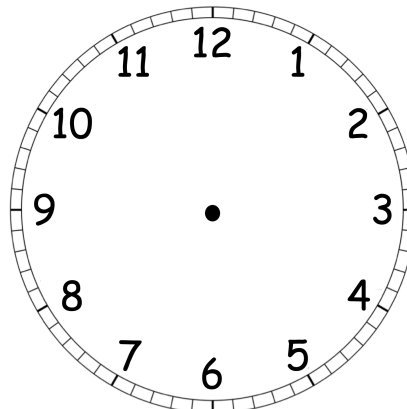
Tick the number that is spelt correctly.

20
twenty

17
seventy

50
fifteen

Show the time **3 o'clock** on the clock.



Name: _____

Primary 5-a-day

Ruby



24th September




$7 - 2 =$

$8 + 9 =$

$10 + 5 =$

$20 - 14 =$

Tick the box with the **fewest** balls.



Write down the whole number that is between 36 and 38.

Here are some number cards.

17

8

3

7


Choose two of the number cards to make this correct.

$\square - \square = 10$

Name: _____

Primary 5-a-day

Ruby



25th September

$7 - 4 =$

$10 - 1 =$

$9 + 5 =$

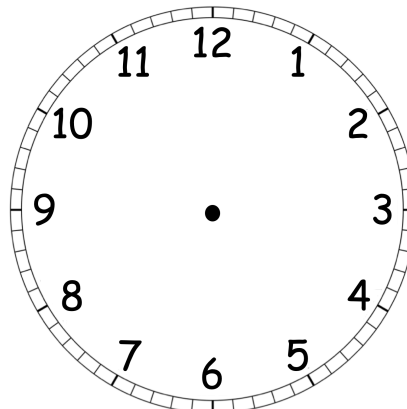
Double 4

Write down three numbers that have a **total of 9**

Put a tick in a square that is **3 squares right** of the shaded square.

<input type="checkbox"/>	<input type="checkbox"/>	<input type="checkbox"/>	<input checked="" type="checkbox"/>	<input type="checkbox"/>	<input type="checkbox"/>	<input type="checkbox"/>
--------------------------	--------------------------	--------------------------	-------------------------------------	--------------------------	--------------------------	--------------------------

Show the time **half past two** on the clock.



Name: _____

Primary 5-a-day

Ruby



26th September

$$10 - \square = 8$$

$$9 + 4 = \square$$

$$6 + 8 = \square$$

$$16 - 5 = \square$$

Which of these numbers is **less than 35** ?

29

40

36

Tick the correct answer.

$$7 - 6 = 2$$

$$10 + 7 = 19$$

$$8 - 4 = 5$$

$$6 + 6 = 12$$

There are 12 sweets in a tub.

7 of the sweets are lemon and the rest are strawberry.

How many strawberry sweets are there?

Name: _____

Primary 5-a-day

Ruby



27th September

$10 - 8 =$

$6 + 6 =$

$11 - 9 =$

$7 + 9 =$

Circle the largest number.

39

45

30

48

41

50

Write 3 numbers to make this calculation correct.

+

+

= 11

Clara needs 14 bricks.

She only has 5 bricks.

How many more bricks does Clara need?

Name: _____

Primary 5-a-day

Ruby



28th September

$1 + 5 =$

$17 - 11 =$

$10 + 2 =$

$15 - 5 =$

Is Erin correct?

Yes

No

35 is less
than 41

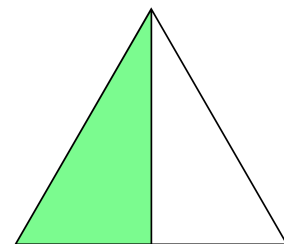
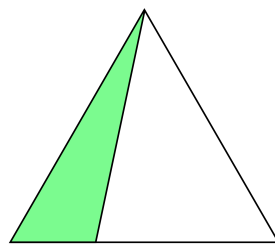
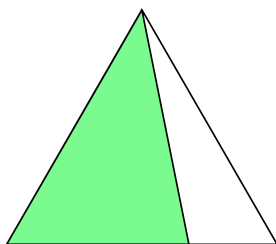


There are 10 pens on a table.

3 pens are taken away.

How many pens are left on the table?

Tick the triangle that has **half** shaded.



Name: _____

Primary 5-a-day

Ruby



29th September

$7 - 2 =$

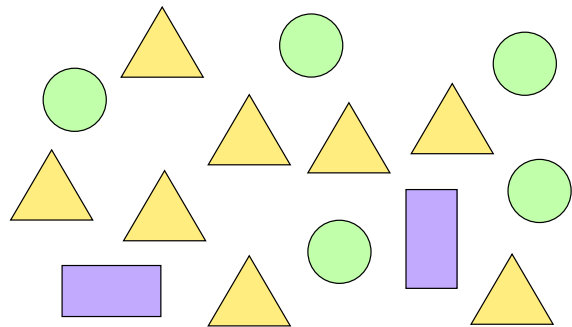
$2 + 10 =$

$16 + 2 =$

$3 +$

$= 19$

How many more circles than rectangles are shown?



James is 15 years old.

Dan is 9 years old.

How many years older than Dan is James?

15 people are on a bus.

7 people get off the bus.

7 more people get off the bus.

How many people are left on the bus?

Name: _____

Primary 5-a-day

Ruby



30th September

$5 - 2 =$

$9 + 6 =$

$16 - 6 =$

$14 + 4 =$

Write the number that is
5 less than 15

Write the number that is
5 more than 40

Here are two signs.

Write a sign in each box to make
each calculation correct.

16 $3 = 13$

12 $2 = 14$

Sonny is 14 years old.

Sonny is 6 years **older** than Logan.

How old is Logan?