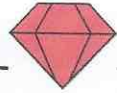


Name: _____

Primary 5-a-day

Ruby



10th September

$2 + 8 =$

10

$20 - 1 =$

19

$11 - 2 =$

9

$5 + 13 =$

18

Which pencil is the **shortest**?

C

A



B



C



D

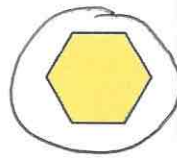



Here is a pattern of shapes.



?

Circle the missing shape.



Liam has 3 stickers.

Noah has 9 stickers.

Oliver has 5 stickers.

How many stickers do they have altogether?

$3 + 9 + 5 = 17$

17