

Name: _____

Primary 5-a-day

Ruby



5th September

$10 - 2 =$

8

$8 - 6 =$

2


$16 - 3 =$

13


$6 + 9 =$

15

Joshua has 2 apples.



George has 6 apples.



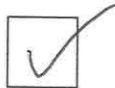
How many apples do they have altogether?

$2 + 6 = 8$

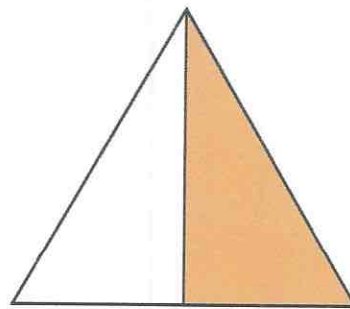
8

Is half of this shape shaded?

Yes



No



Count down in twos.

20

18

16

14

12

10