

Name: _____

Primary 5-a-day

Emerald






15th April

$42 + 6 =$

$30 + 30 + 30 =$

Here are some signs.

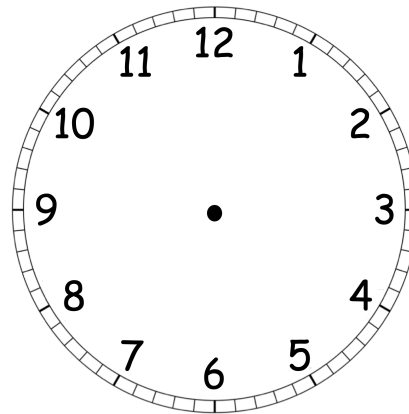


Write a sign in the box to make this correct.

88

88

Show the time **quarter past 5** on the clock.



John needs 36 party hats.

The party hats are sold in packs of 10.

How many packs of party hats does John need to buy?

_____ packs