


Name: \_\_\_\_\_

Primary 5-a-day

Emerald



1st January

$$\frac{1}{2} \text{ of } 18 = \square$$

$$30 - 15 = \square$$

Circle the odd numbers.



53      24      86

90      79      13

Isla has 2 boxes.

She puts 8 books in each box.

How many books has she put in the boxes altogether?



Sam has 42p

Conor gives Sam these coins.



How much money does Sam have now?

 p