

Name: _____

Primary 5-a-day

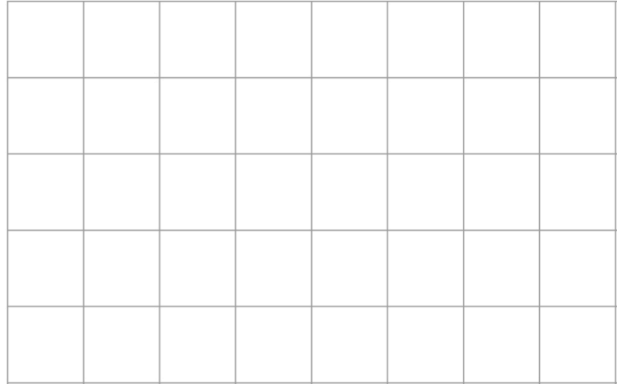
Emerald



10th January


$$+ 20 = 50$$

$$59 - 25 =$$



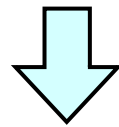
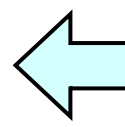

How many sides does a hexagon have?

Here is an arrow.



The arrow is rotated by a **quarter turn clockwise**

Circle which way the arrow now points.



How much taller is Leo's sunflower than Tom's sunflower?

 cm