


Name: \_\_\_\_\_

Primary 5-a-day

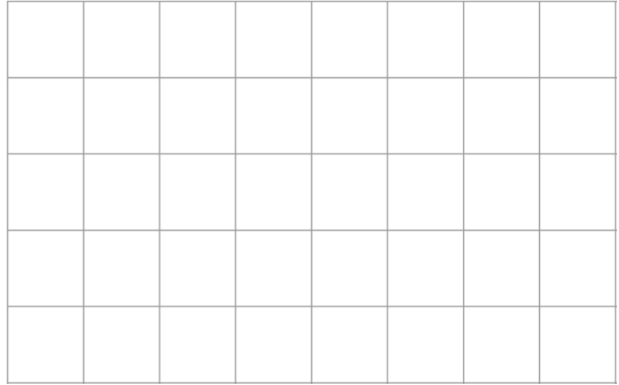
Emerald



2nd January

$8 + 7 + 5 =$

$87 - 21 =$



Is Ben correct?


Yes

No

50 minutes is longer than 1 hour.



Draw a line of symmetry on this shape.



Finn needs 13 biscuits.

The biscuits are sold in packets of 5.

How many packets of biscuits does Finn need to buy?

\_\_\_\_\_ packets