

Name: _____

Primary 5-a-day

Emerald

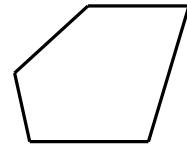
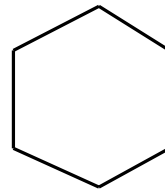
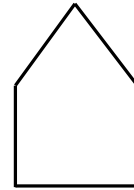
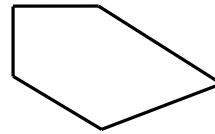


4th January

$97 + 4 =$

$67 - 40 =$

Tick the shape that is **not a pentagon**.



Here are 4 number cards.

9

4

5

8

Use two of the cards to make the smallest possible 2 digit number.

There are 50 sweets.

Tom takes 30 sweets.

Ben takes 17 sweets.

How many sweets are left?