

Name: _____

Primary 5-a-day

Emerald


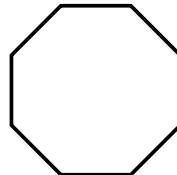
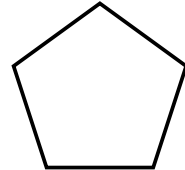
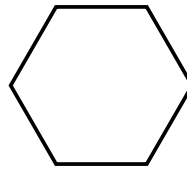


21st March


$49 - 20 =$

$56 + 7 =$

Tick the octagon.



How much taller is Percy than Pip?

 cm

The colours of sweets in a bag.

○ stands for 1 sweet

Blue	○ ○ ○ ○
Green	○ ○ ○
Orange	○ ○ ○ ○ ○
Red	○ ○

How many sweets are in the bag altogether?