


Name: _____

Primary 5-a-day

Emerald



29th May

$96 + 4 =$

$94 - 70 =$


Bill has 30 socks.

Max has 30 socks.

Tim has 20 socks.

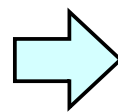
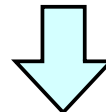
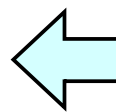
How many socks do they have altogether?

Here is an arrow.



The arrow is rotated by a **quarter turn clockwise**

Circle which way the arrow now points.



Match the calculations that have the same answer.

$20 - 1$

$10 + 9$

$40 - 1$

$40 + 49$

$80 - 1$

$30 + 9$

$50 - 1$

$30 + 19$