

Name: _____

Primary 5-a-day

Emerald



16th November

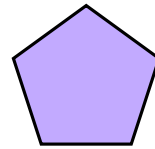
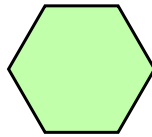
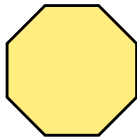
$$\square + 70 = 100$$

$$7 + 95 = \square$$

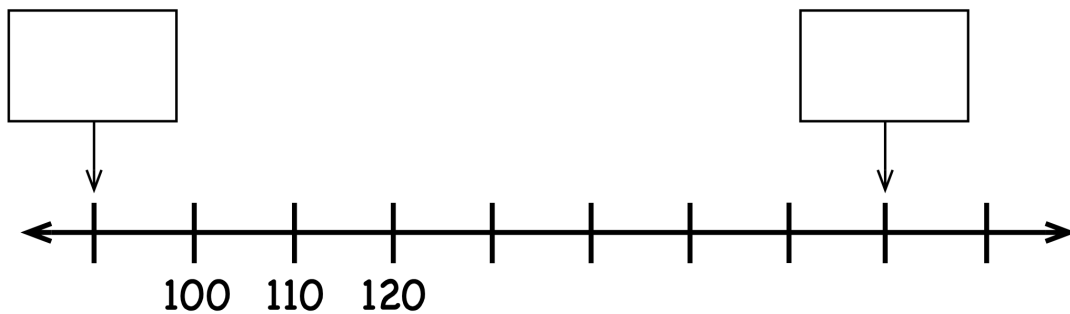
hexagon

octagon

pentagon



The number line is going up in tens.
Write the missing numbers.



There are 45 toffees.

20 girls and 18 boys each take a toffee.

How many toffees are left?