


Name: _____

Primary 5-a-day

Emerald

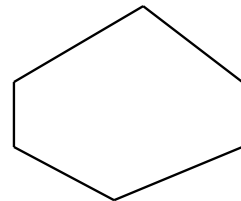
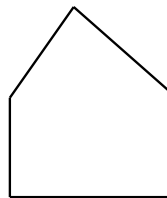
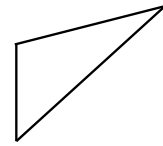
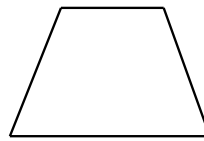


20th December

$9 + 5 + 4 =$

$70 - 12 =$

Tick the hexagon.



	Rugby	Golf
Ali	✓	✗
Carl	✓	✓
Frank	✗	✓
Nick	✓	✗

Circle the names of the boys who play rugby **and** golf.

Ali

Carl

Frank

Nick

Write the missing numbers in the boxes.

