


Name: _____

Primary 5-a-day

Emerald

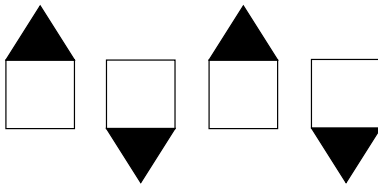


13th February

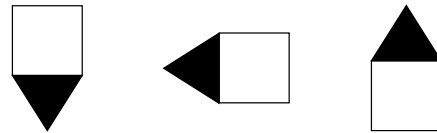
$8 + 8 + 8 =$

$23 + 50 =$

Here is a pattern of shapes.



Circle the next shape in the pattern.



29

31

Use the 58 and 62 to make each of these correct.

$\square + 2 = \square$

2

+

=

-

=

-

=

Josie wants to read 100 books.

Last month she read 20 books.

This month she read 50 books.

How many more books does she need to read?

