


Name: \_\_\_\_\_

Primary 5-a-day

Emerald

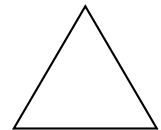
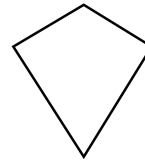
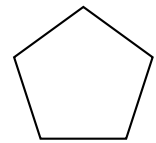
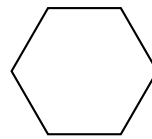
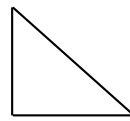


25th February

$6 + 32 =$

$100 - 16 =$

Tick the pentagon.



Write the missing number.

9



double and add 20



Here is a number line.

Write the missing number in the box.

