

Name: _____

Primary 5-a-day

Emerald








26th February

$50 + 30 =$

$19 + 11 =$

Find the total of the numbers shown on the dice.



How long is this line?



cm

An orange costs 35p

An apple costs 25p

Robin pays with a £1 coin.

How much change does he get?

p