

Name: _____

Primary 5-a-day

Emerald

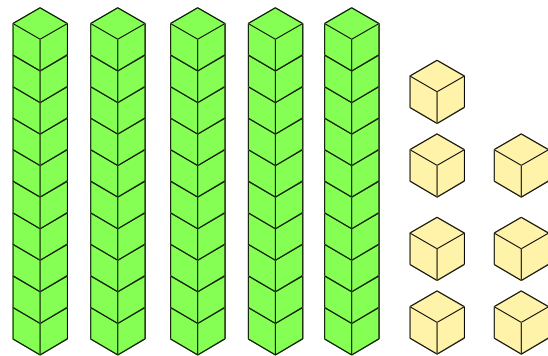


6th February

$73 - 30 =$

$30 + 30 + 30 =$

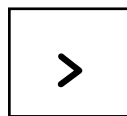
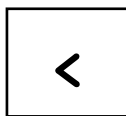
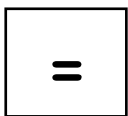
What number is shown?



Fill in the missing number to make this pair of cards have a total of 100

60

Here are some signs.



Write signs in the boxes to make these correct.

59

54

78

91