


Name: \_\_\_\_\_

Primary 5-a-day

Emerald

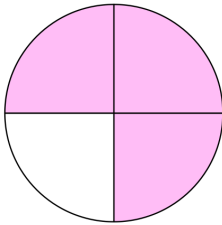


23rd January

$46 - 20 =$

$53 - 5 =$

What fraction of this circle is shaded?



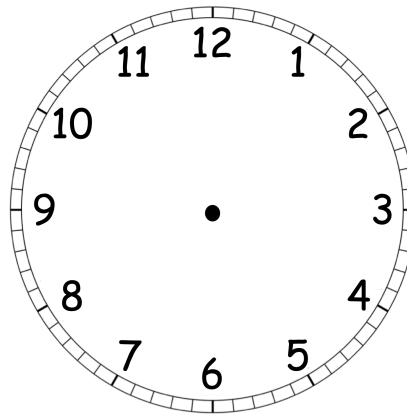
a third

a quarter

three quarters

a half

Show the time **quarter past seven** on the clock.



This pattern goes up by 10 each time.

2

12

22

32

What is the next number in the pattern?