


Name: \_\_\_\_\_

Primary 5-a-day

Emerald



28th July

$90 - 10 =$

$73 + 8 =$

Write these numbers in order, from smallest to largest.

75

57

77

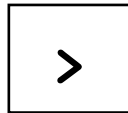
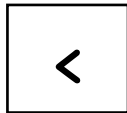

56

61

smallest

largest

Here are some signs.



Write a sign in the box to make this correct.

13

17

How much taller is Josie's sunflower than Megan's sunflower?

 cm