

Name: _____

Primary 5-a-day

Emerald



20th June

$$\frac{1}{2} \text{ of } 14 = \square$$

$$91 - 8 = \square$$

Max draws a line of symmetry on the letter Y.

Is the line of symmetry right?

Yes

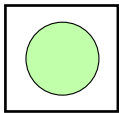
No



In a game

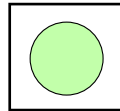





is worth 2 points



is worth 10 points

How many points are these cards worth altogether?



points

This pattern goes up by 10 each time.

16 26 36 46

What is the next number in the pattern?