

Name: _____

Primary 5-a-day

Emerald



28th March

$50 + 23 =$


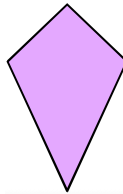

$22 +$

$= 31$

kite

rectangle

square



Vinny has 60p

Coby has 15p more than Vinny.

Circle the coins that Coby has.



Measure the length of the pencil.



cm