

Name: \_\_\_\_\_

Primary 5-a-day

Emerald



22nd May

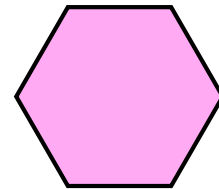
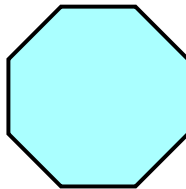
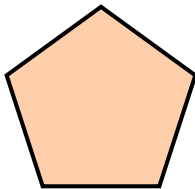
$38 - 5 =$

$96 + 6 =$

octagon

pentagon

hexagon



A coat costs £30

Paul has £19

How much more money does he need?

£

Write digits in the boxes to make this correct.

$$\boxed{1} \boxed{\phantom{0}} + \boxed{\phantom{0}} \boxed{0} = \boxed{2} \boxed{4}$$