


Name: \_\_\_\_\_

Primary 5-a-day

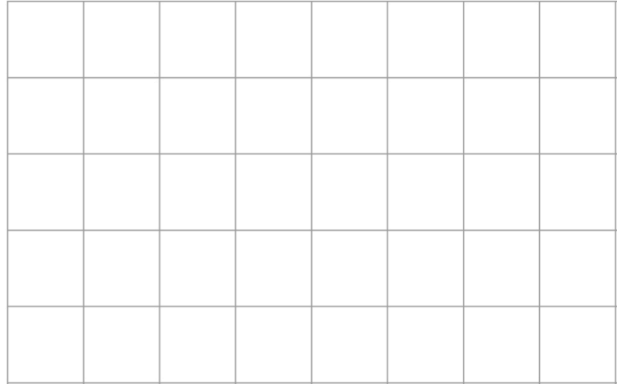
Emerald



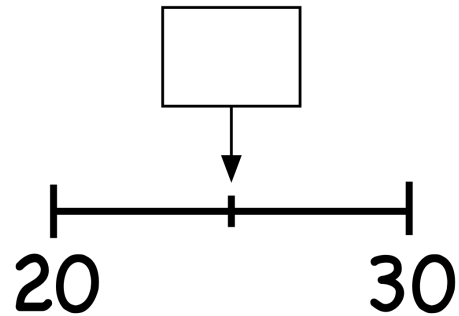
17th October

$23 + 20 =$

$49 - 36 =$



What number is halfway between 20 and 30



40p each



15p each

Ciara buys 2 apples and 1 banana.

How much does Ciara spend?

 p

A match lasts 1 hour.

The teams have played for 40 minutes.

How many minutes do they have left to play?

 minutes