


Name: _____

Primary 5-a-day

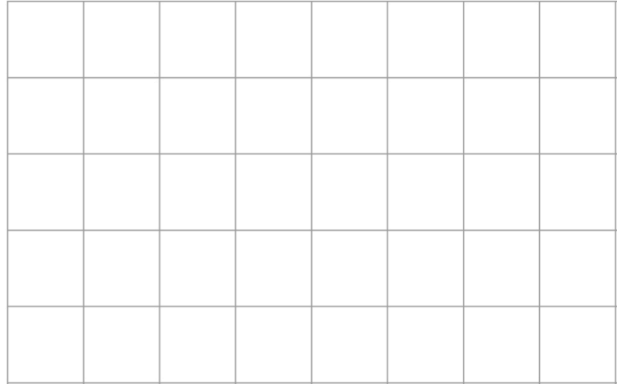
Emerald



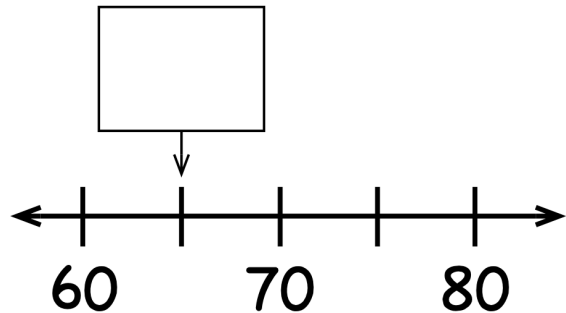
25th October

$50 - 10 =$

$68 - 53 =$



Write the correct number in the box.



Circle all the **odd** numbers

85

94

63

58

79

42

Sonny and Logan share these coins equally.

How much do they each get?

 p