


Name: _____

Primary 5-a-day

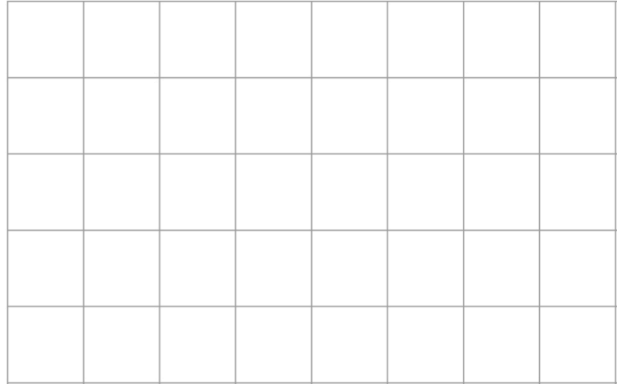
Emerald



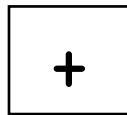
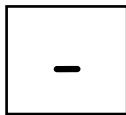
25th September

$29 - 7 =$

$81 + 16 =$



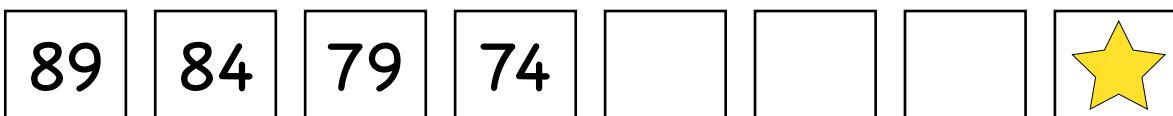
Here are two signs.



Write a sign in each box to make each calculation correct.

$60 \square 15 = 45$

$45 \square 15 = 60$



What number goes in the box with the star?

Libby needs 29 wafers.

The wafers sold in boxes of 10.

How many boxes of wafers does Libby need to buy?